



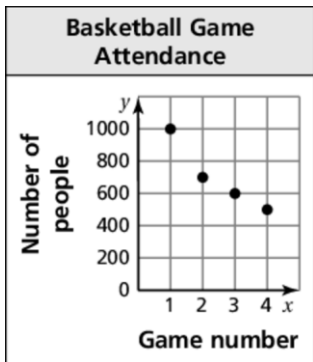
Puzzle Time

Name _____ Date _____

What Do You Call A Grouchy Person At The Beach?

Write the letter of each answer in the box containing the exercise number.

In Exercises 1–5, use the scatter plot.



Answers

N. 700 E. Game 1

R. Game 2 T. 600

D. Game 4 M. Game 3

C. 500 I. 1000

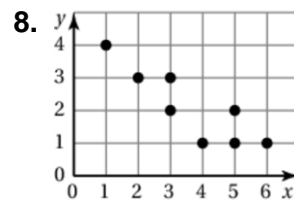
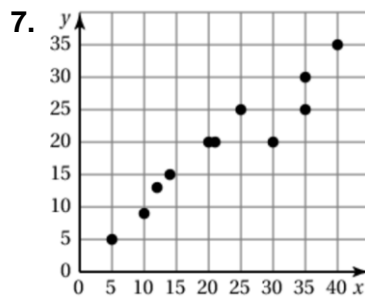
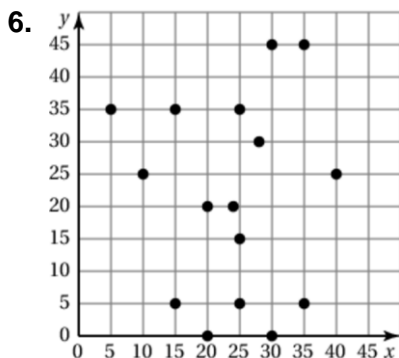
B. positive linear relationship

A. negative linear relationship

S. no relationship

1. Which game did 500 people attend?
2. How many people attended Game 2?
3. Did more people attend Game 2 or Game 3?
4. How many more people attended Game 1 than Game 4?
5. Describe the relationship shown by the data.

Tell whether the data show a *positive*, a *negative*, or *no* relationship.



6	5	2	1	4	3	8	7
---	---	---	---	---	---	---	---