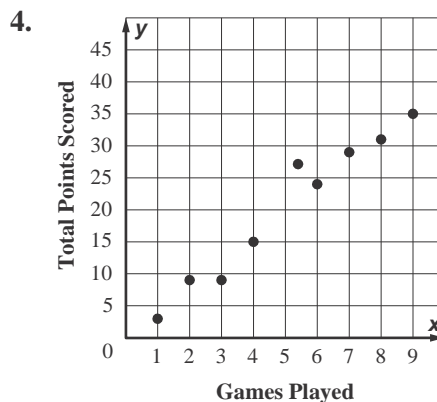
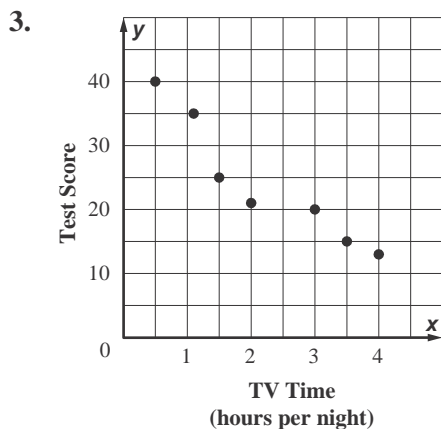
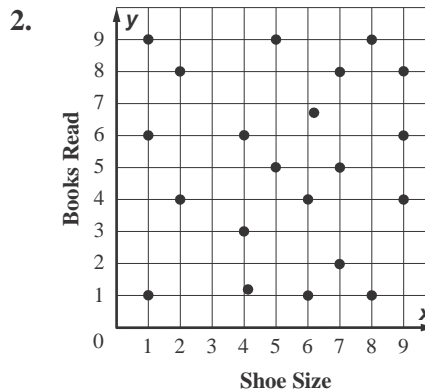
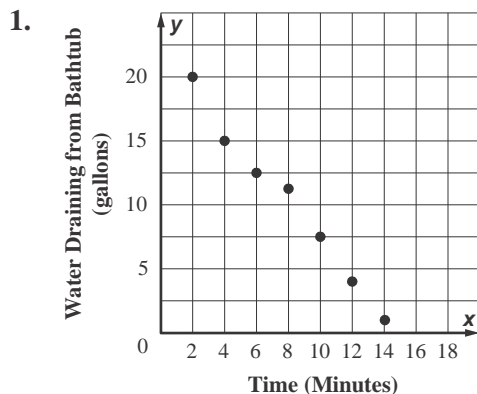


Lesson 1 Skills Practice

Scatter Plots

Explain whether the scatter plot of the data for each of the following shows a *positive*, *negative*, or *no* association. Interpret the scatter plot.



5. **E-MAIL** Construct a scatter plot of the number of E-mails Vincent received over the past six days. Interpret the scatter plot.

Day	1	2	3	4	5	6
E-mail	16	21	3	11	19	5