


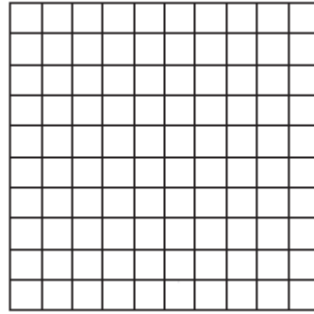
Lesson 5 Extra Practice***Graph a Line Using Intercepts***

State the x - and y -intercepts of each equation. Then use the intercepts to graph the equation.


1. $3x + y = 9$




2. $-2x + y = 6$



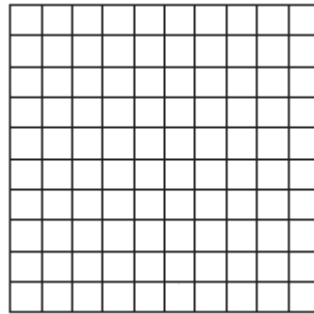
3. $3x - 2y = 12$




4. $2x - y = 6$




5. $2x - 4y = 8$




6. $-5x + y = -10$



7. $6x + 2y = 12$



8. $5x - 2y = 15$



9. $-4x - 3y = 24$

