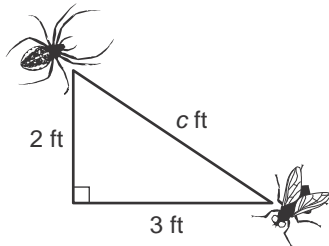


Lesson 6 Skills Practice

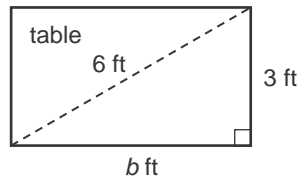
Use the Pythagorean Theorem

Write an equation that can be used to answer the question. Then solve. Round to the nearest tenth if necessary.

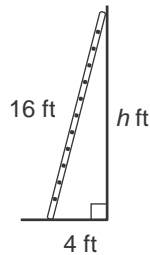
1. How far apart are the spider and the fly?



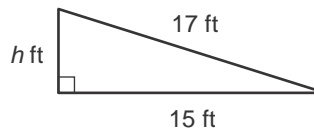
2. How long is the tabletop?



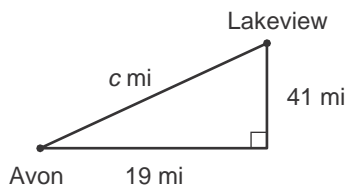
3. How high will the ladder reach?



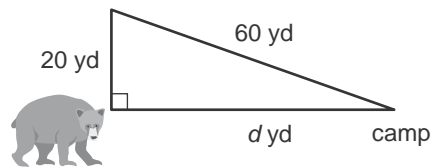
4. How high is the ramp?



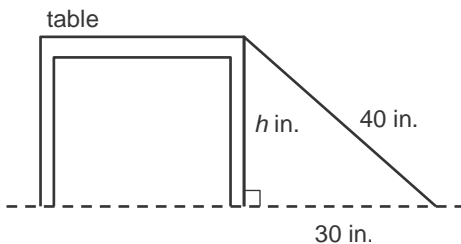
5. How far apart are the two cities?



6. How far is the bear from camp?



7. How tall is the table?



8. How far is it across the pond?

