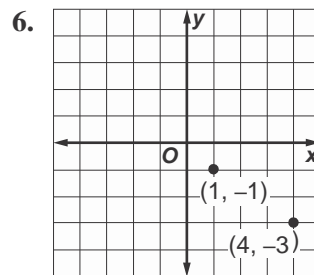
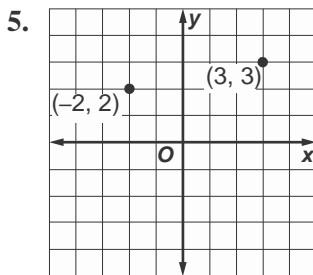
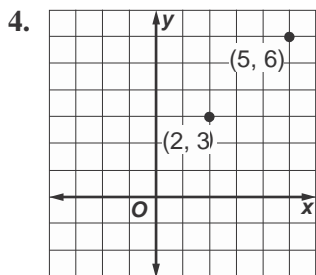
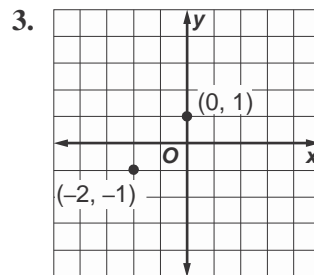
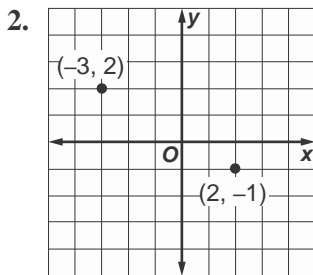
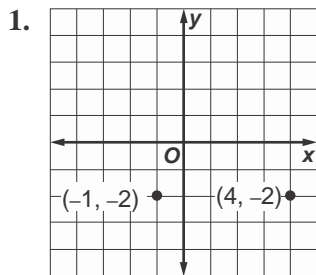


Lesson 7 Skills Practice

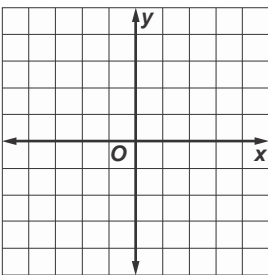
Distance on the Coordinate Plane

Find the distance between each pair of points whose coordinates are given. Round to the nearest tenth if necessary.

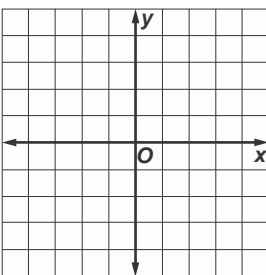


Graph each pair of ordered pairs. Then find the distance between the points. Round to the nearest tenth if necessary.

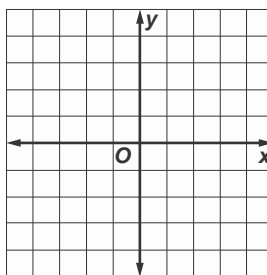
7. $(-3, 0), (3, -2)$



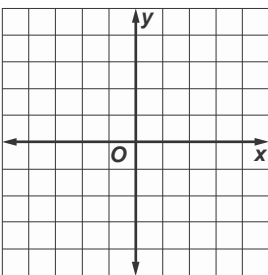
8. $(-4, -3), (2, 1)$



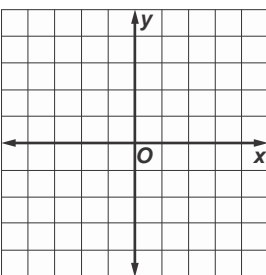
9. $(0, 2), (5, -2)$



10. $(-2, 1), (-1, 2)$



11. $(0, 0), (-4, -3)$



12. $(-3, 4), (2, -3)$

