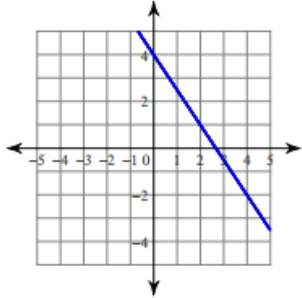


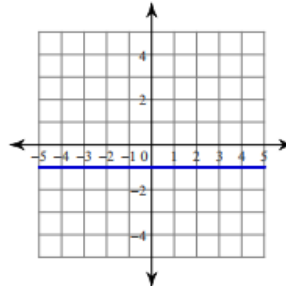
## Writing Lines from a Graph

For each graph write the equation of the line in *slope-intercept* form  $y = mx + b$ .

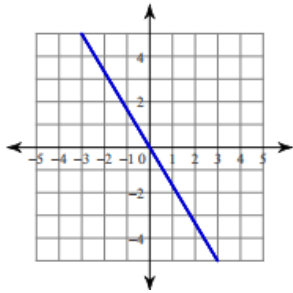
1. \_\_\_\_\_



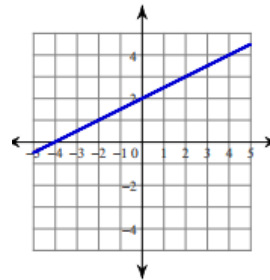
5. \_\_\_\_\_



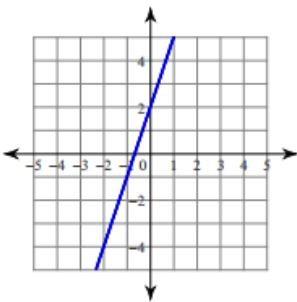
2. \_\_\_\_\_



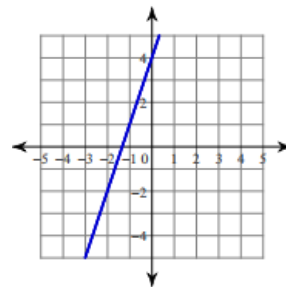
6. \_\_\_\_\_



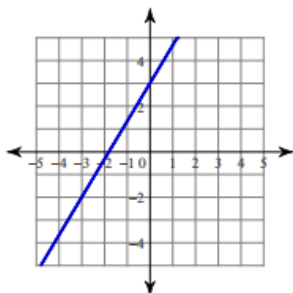
3. \_\_\_\_\_



7. \_\_\_\_\_



4. \_\_\_\_\_



8. \_\_\_\_\_

