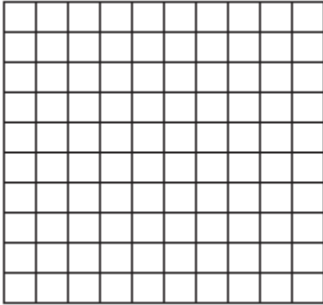


Lesson 7 Extra Practice


Distance on the Coordinate Plane

Graph each pair of ordered pairs. Then find the distance between the points. Round to the nearest tenth if necessary.

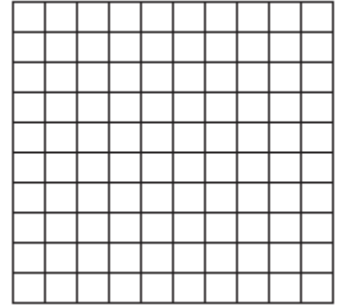
1. $(-5, 1), (2, -3)$




2. $(5, -1), (11, 7)$




3. $(-3, 5), (2, 7)$




4. $(7, -9), (4, 3)$




5. $(5, 4), (-3, 8)$




6. $(-8, -4), (-3, 8)$



7. $(2, 7), (10, -4)$



8. $(9, -2), (3, 6)$



9. $(2, 3), (-1, 6)$

